

Key Stage 2

Based on the new 2016 SATs



Easter Revision Booklet

Timed daily activities in
Arithmetic, Reasoning and
Grammar for 10 days



Name:	
Teacher's Name:	
School:	



Day 1

Arithmetic Questions

**Don't forget to start
your timer!**

1

$$40\% \text{ of } 1900 =$$

[illegible]

10

1 mark

2

$$3815 - 1786 =$$

[illegible]

10

1 mark

3

$$2592 \div 6 =$$

[illegible]

10

1 mark

Day 1

Arithmetic Questions



4

$$\frac{2}{10} + \frac{6}{10} =$$

1 mark

5

$$5.01 + 9.4 =$$

1 mark

6

$$27 \times 6 =$$

1 mark

Day 1

Arithmetic Questions

7

$$1\frac{1}{7} - \frac{4}{7} =$$

1 mark

8


$$650 - 24 \times 7 =$$

1 mark

9

$$201 - 198 =$$

1 mark



What do you call a rabbit
with fleas?
Bugs Bunny!

Day 1

Arithmetic Questions

10	$ \begin{array}{r} 2465 \\ \times 18 \\ \hline \end{array} $																				2 marks
Show your method	<div style="border: 1px solid black; height: 40px; width: 100%;"></div>																				

Now, use your answers to mark your work and write your score in your booklet and on your scoresheet!

Don't worry, if you didn't get all of the questions right, your teacher will be able to help you once you get back to school. Record your score and time below and on your scoresheet for your teacher!



Well done!

You've completed your brain workout for today!

Time taken

min	sec
-----	-----

Day 2

Reasoning Questions

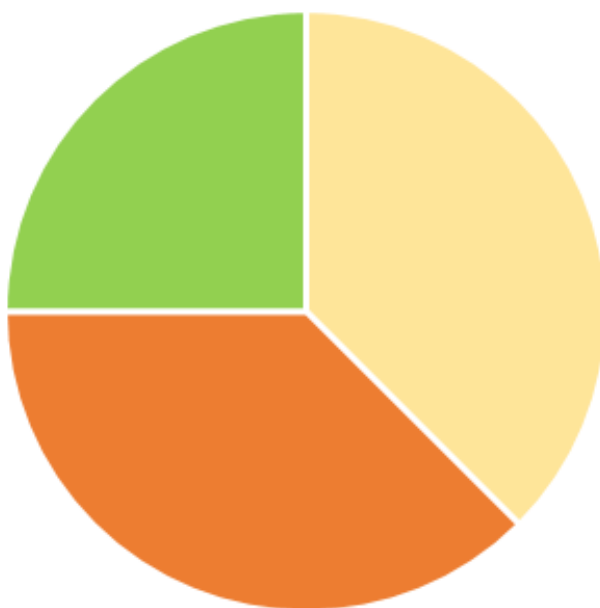
**Don't forget to start
your timer!**



A school sells juice.

The pie chart compares the money the school took last year for three different flavours of juice.

The school took **£6,916** for apple juice. Sales of lemon and orange were **equal**.



■ lemon ■ orange ■ apple

1

How much money did the school take for orange juice?

Show
your
method

£

2 marks

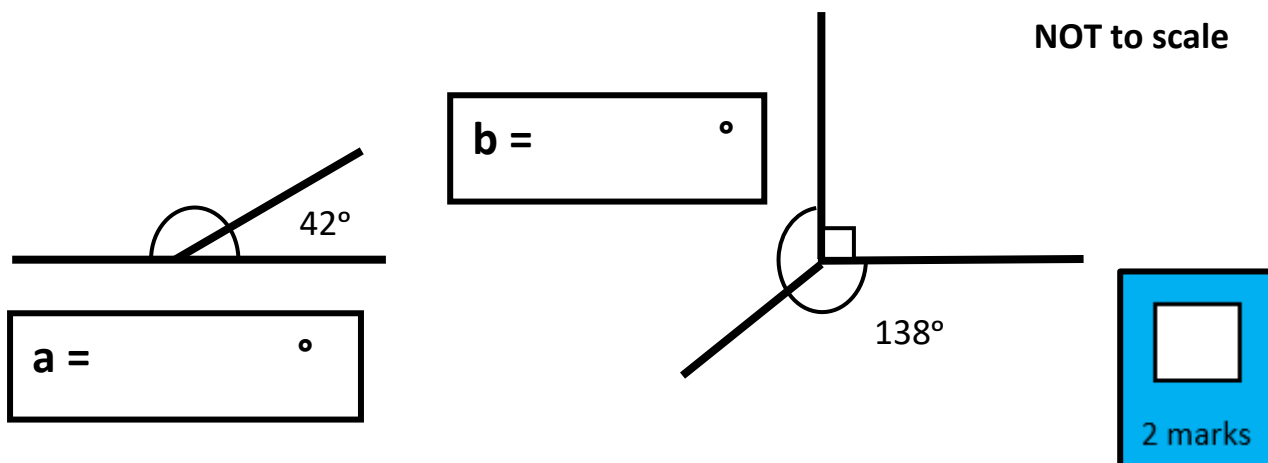


Day 2

Reasoning Questions

2

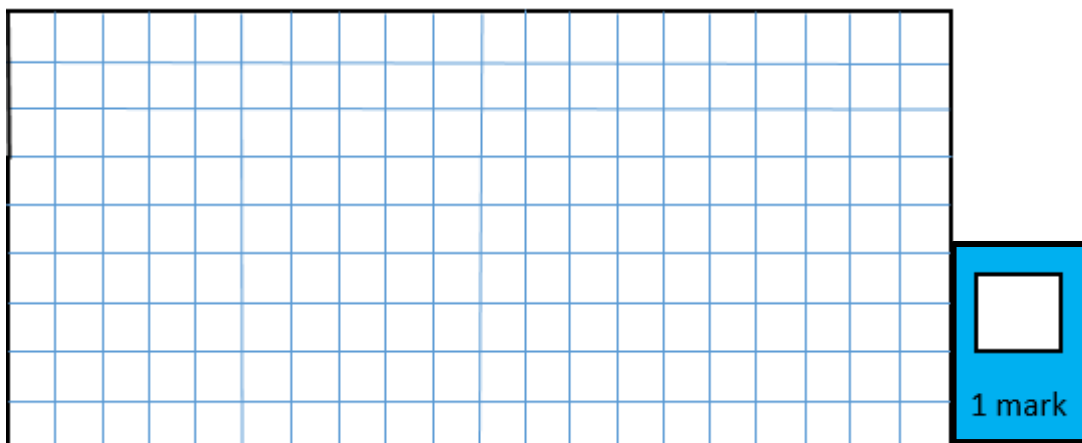
Calculate the angles a and b



3a

Draw a **square** that has the perimeter of 12cm

Each square has an area of 1cm². NOT to scale.



3b

What is its area?

cm²

1 mark

Day 2

Reasoning Questions

Write the missing fraction

4

$$\frac{1}{7} + \frac{4}{7} + \boxed{} = 1$$

1 mark

5

Write two factors of 14

and

1 mark

6

Write a prime number between

5 and 15



45 and 55



1 mark



Well done!

You've completed your brain workout for day two!

min

sec

Day 3

Grammar Questions

Don't forget to start
your timer!



1

Tick the sentence that must end with a question mark

Tick **one**

The cinema opens at four

☐

We have two bags of popcorn

☐

Can I have my ticket

☐

We must keep quiet

☐

☐
1 mark

2

Which pair of verbs correctly complete the sentence below?

Dad never _____ us easter eggs, he _____ us
sweets last year.

Tick **one**

buys / brought

☐

buy / bought

☐

buys / bought

☐

buy / brought

☐

☐
1 mark

Day 3

Grammar Questions

3

Draw a line to match each prefix to the correct word so that it makes a new word.

One has been done for you

im

interpret

mis

possible

un


adequate

in

doubtable

de

construct



How does the Easter bunny stay fit?
Hare-robics!

2 marks

Day 3

Grammar Questions

4

Which sentence has been **punctuated** correctly?

Tick **one**

I need my shorts trainers, and spare socks for PE tomorrow.

☐


I need, my shorts, trainers, and spare socks for PE tomorrow.

☐

I need shorts, trainers, and spare socks for PE tomorrow.

☐

I need shorts, trainers and spare socks for PE tomorrow.

☐


5

Which sentence below is written in **past tense**?

Tick **one**

The car went into the garage.

☐

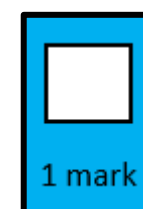
The car owners are taking the car into the garage.

☐

The garage is in the village.

☐

There is one garage near our home.

☐


Day 3

Grammar Questions



6

Circle one **verb** in each underlined pair to complete the sentences using Standard English.

The boys have/had finished their cereal and was/were eating toast when the post arrived.

2 marks

7

Write the **contracted** form of the underlined words in the box.

The teacher could not find the key to open the door.



1 mark

8

Which sentence uses an apostrophe correctly?

Tick **one**

James put Daniels' bag away.

☐

James put Daniel's bag away.

☐

Jame's put Daniels bag away.

☐

James' put Daniels bag away.

☐

1 mark

Day 3

Grammar Questions



9

What does the pronoun her refer to in the following sentences?

Laura carefully gave Mr Thompson a small drawing with a flower on. Her artwork had always been excellent.

Tick **one**

Laura

☐


Mr Thompson

☐

artwork

☐

drawing

☐


Well done!

You've completed your brain workout for day three!

Time taken

min

sec



Don't forget to start
your timer!

Day 4

Grammar Questions

1

Circle the correct **homophone** for each sentence.

The brave knight/night gallantly road/rode into the town on a great/grate white hoarse/horse.

2 marks

2

Circle the correct spelling for each of the three words below.

Circle **one** below

excellant

excellent

excelent

Circle **one** below

special

specail

speshal

Circle **one** below

neccessary

necessary

neccesary

2 marks

Day 4**Grammar Questions****3**

There are **two words** spelt incorrectly in the passage below.
Circle them.

On Saterdag, the children visited the zoo. Ned came home with a baloon and Rory bought an elephant mask.


2 marks**4**


Circle the correct spelling to complete the sentence.

After science, we have spelling **practise/practice**. To be successful in spelling, we must try to **practise/practice** our words every day.


1 mark**5**

Circle the correct spelling to complete the sentence.

The doctor **adviced/advised** me to take his **advice/advise**.



How does a rabbit keep his fur looking good?
With hare-spray!


1 mark

Day 4

Grammar Questions

6

Circle the **three** spelling mistakes.

Laila's green, rectangular kite drifted into the air. She wached it untill she could see it no more.

2 marks

7

Complete the sentence with a **noun** formed from the verb **represent**

Our class council _____ made a speech at the school improvement meeting.

1 mark

Total Score

11



Well done!

You've completed your brain workout for day four!

Time taken

min

sec



Day 5

Reasoning Questions

Don't forget to start
your timer!

1

Write **one** number in each box

One has been done for you.

	Multiple of 10	Not a multiple of 10
Multiple of 3	60	
<u>Not</u> a multiple of 3		

2 marks

2

Look at this number. Write the value of the **tenths** digit in the box.

42,961.74

tenth digit



Keep going! You're
doing an eggs-cellent
job!

1 mark

Day 5

Reasoning Questions

3

Here are six cards. Use a card to complete each calculation.

$\times 10$

$\times 100$

$\times 1000$

$\div 10$

$\div 100$

$\div 1000$

2.1

= 210

2.1

= 0.21

2.1

= 0.021

2 marks

4

Circle all of the **prime** numbers below.

4

7

13

15

16

19

1 mark

Day 5

Reasoning Questions

5

Circle the fraction equivalent to $2\frac{1}{4}$

$$\frac{7}{4}$$

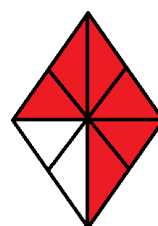
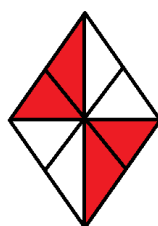
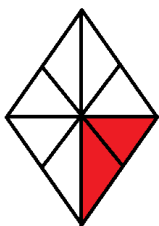
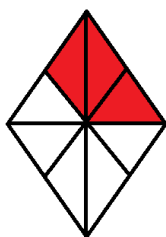
$$\frac{11}{4}$$

$$\frac{9}{4}$$

1 mark

6

Match each shape by drawing a line to the equivalent fraction.




$$\frac{1}{4}$$

$$\frac{1}{2}$$

$$\frac{3}{4}$$

$$\frac{3}{8}$$

2 marks



What day does an egg dislike the most?
Fry-day!

Day 5

Reasoning Questions



7

Write **487** minutes in hours and minutes

hours

minutes

1 mark



Well done!

You have completed day 5
of your Easter booklet!

Time taken

min

sec



Day 6

Grammar Questions

Don't forget to start
your timer!

1

Tick the sentence where the highlighted word is used as a
subordinating conjunction.

Tick **one**

He was at school **before** you.

☐

She did her homework **until** dinnertime

☐

Do not undo your seatbelt, **until** the car
has stopped.

☐

When the sun is out, we will go outside.

☐

☐
1 mark

2

Explain how the comma changes the meaning in the two sentences
below.

Can you visit Grandpa?

Can you visit, Grandpa?

☐
2 marks

Day 6

Grammar Questions



3

How do the words As carefully as he could function in the sentence below

As carefully as he could, he unwrapped the foil to reveal the chocolate egg.

Tick **one**

as a relative clause

☐

as a noun phrase

☐

as a fronted adverbial

☐

as a conjunction

☐

1 mark

4

Tick one box to identify the **relative clause** in the sentence below.

Amy, who ran the fastest, stood on the tallest podium.

☐
☐
☐
☐

1 mark

Day 6

Grammar Questions



5

Tick one box in each row to show how the **modal verb** affects the **meaning** of the sentence.

Sentence	Modal verb indicates certainty	Modal verb indicates possibility
Dean must be exhausted; he has been working all day.		
Richard could pass his driving test tomorrow.		
Sam might have caught the bus on time.		
Kelly will have fish and chips for dinner tonight.		

2 marks

6

Tick one box in each row if the underlined clause is a **main clause** or a **subordinate clause**.

Sentence	Main clause	Subordinate clause
Sid, <u>who lived down the road</u> , was Ollie's best friend.		
<u>Ollie bought Sid a new football</u> , as he lost his other one.		
<u>Unless Ollie finishes his work</u> , he won't be able to go to the park.		

2 marks

Day 6

Grammar Questions

7

Circle the **two words** in the sentence below that are **synonyms** of each other.

“I’m delighted that you can attend the party,” smiled Chris, clearly thrilled about another attendee.

1 mark



Well done!

You have completed day 6 of your Easter booklet!

Time taken

min

sec



**Don't forget to start
your timer!**

Day 7

Arithmetic Questions

1

$$1855 \div 7 =$$

[illegible]

11

1 mark

2

$$9024 - 3112 =$$

[illegible]

10

1 mark

3

$$624 + 19 =$$

10

1 mark

Day 7

Arithmetic Questions



4

$$1.04 \div 10 =$$

1 mark

5

$$\begin{array}{r} 81 \\ \times 17 \\ \hline \end{array}$$

Show
your
method

2 marks

6

$$\frac{5}{11} + \frac{4}{11} =$$

1 mark

Arithmetic Questions

$$62 - 16 \div 2 =$$

10

1 mark

90% of £62.70 =

7

1 mark



You have completed day 7
of your Easter booklet!

Time taken

min sec



Day 8

Grammar Questions

Don't forget to start
your timer!

1

Tick the sentence that must end with a question mark

Tick **one**

Which way is the bowling alley

☐

I don't know where it is

☐

Our game will last for two hours

☐

I would like a burger and some chips

☐

☐
1 mark

2

Tick **two** sentences that uses a **hyphen**.

Tick **two**

There are thirty-five children in our class.

☐

Our class – Sapphire – enjoy swimming.

☐

I'm not a fan of pizza – I prefer pasta.

☐

Great-aunt Maria is staying with us this weekend.

☐

☐
1 mark

Day 8

Grammar Questions

3

Tick one box to identify where the **comma** should appear in the sentence.

April had tried ☐ running ☐ cycling and swimming ☐ and still ☐ didn't like sport!


1 mark

4

Tick one box to identify where the **comma** should appear in the sentence.

Carefully ☐ Zachary placed the ☐ egg back ☐ into the nest.

1 mark



Why was the easter bunny sad?

sad?

Because he was having a bad hare day!

Day 8

Grammar Questions

5

Which punctuation mark should be used in the place indicated by the arrow?

“WOW” exclaimed Gemma, rubbing her eyes in disbelief.
↑

Tick **one**

A full stop

☐

A comma

☐

An exclamation mark

☐

A question mark

☐

1 mark

6

Insert a **colon** in the correct place in the following sentence.

You will need the following an apron, a bowl and a wooden spoon.



1 mark

Day 8

Grammar Questions

7

Complete the table below by adding a suffix to each noun to make an adjective.

One has been done for you.

Noun	Adjective
success	successful
beauty	
magic	
power	
comfort	

2 marks

8

Re-write the sentence below, adding a subordinate clause.
Remember to punctuate your answer correctly.

The sheep ate the grass.

1 mark


Day 8


Grammar Questions

9

Draw a line to match each word to its correct **antonym**.

One has been done for you

repulsive		present
absent		enemy
adequate		cowardly
brave		insufficient
ally		attractive



What do you get if you pour
hot water down a rabbit hole?
Hot cross bunnies!

1 mark


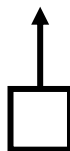
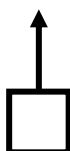
Day 8

Grammar Questions

10

Label the boxes with V (verb), S (subject) and O (object) to show the parts of the sentence.

Thomas kicked the football.



Well done!

You have completed day 8
of your Easter booklet!

Time taken

min

sec



Day 9


Reasoning Questions

Don't forget to start
your timer!

1

Write two missing digits to make this **long multiplication** correct.

$$\begin{array}{r}
 68 \\
 \times \square 1 \\
 \hline
 68 \\
 34\square 0 \\
 \hline
 3468
 \end{array}$$




2

Here is a number written in Roman numerals.

CLV

Rewrite this number in the box below in **figures**.



Day 9**Reasoning Questions****3**Round **67, 874**

to the nearest 100

to the nearest 1,000

to the nearest 10,000

 2 marks


Reasoning Questions

Two kilograms of bronze costs £7.20

What is the cost of 300g of bronze?

£

2 marks



Reasoning Questions

On Monday, a school had raised $\frac{3}{4}$ of their fundraising target.

By Friday, they had raised the other £75.

How much did the school raise in total?

Show
your
method

£

2 marks



You have completed day 9
of your Easter booklet!

Time taken

min sec



Day 10

Arithmetic Questions

**Don't forget to start
your timer!**

1

$$214 + 891 =$$

[illegible]

11

1 mark

2

$$6.72 - 3.9 =$$

[illegible]

7

1 mark

3

118 x 9 =

--	--	--	--	--	--

1

1 mark

Day 10

Arithmetic Questions

4

$$14^2 =$$

[illegible]

1 mark

5

$$904,566 - 81,482 =$$

1 mark

6

$$\frac{3}{4} + \frac{1}{5} =$$

Year	2010	2011	2012	2013	2014	2015	2016	2017	2018	2019	2020	2021	2022	2023	2024	2025	2026	2027	2028	2029	2030
Population (millions)	7.7	7.9	8.1	8.3	8.5	8.7	8.9	9.1	9.3	9.5	9.7	9.9	10.1	10.3	10.5	10.7	10.9	11.1	11.3	11.5	11.7
GDP (trillion USD)	1.5	1.7	1.9	2.1	2.3	2.5	2.7	2.9	3.1	3.3	3.5	3.7	3.9	4.1	4.3	4.5	4.7	4.9	5.1	5.3	5.5
Life expectancy (years)	75	76	77	78	79	80	81	82	83	84	85	86	87	88	89	90	91	92	93	94	95
Urban population (%)	55	57	59	61	63	65	67	69	71	73	75	77	79	81	83	85	87	89	91	93	95
Renewable energy (%)	10	12	14	16	18	20	22	24	26	28	30	32	34	36	38	40	42	44	46	48	50
Carbon emissions (Gt CO2e)	15.0	15.5	16.0	16.5	17.0	17.5	18.0	18.5	19.0	19.5	20.0	20.5	21.0	21.5	22.0	22.5	23.0	23.5	24.0	24.5	25.0

1 mark

Day 10

Arithmetic Questions

7

$$82 - 9 \times 8 =$$

1 mark

8

$$35 \% \text{ of } \pounds 122.80 =$$

1 mark

9

$$\frac{2}{3} \times \frac{2}{5} =$$

1 mark



Well done!

You have completed day 10
of your Easter booklet!

Time taken

min	sec
-----	-----

Congratulations!

You have completed your Easter Booklet!

Happy Easter!

Don't forget to mark your work, if you have been asked and hand
your score sheet to your teacher!

WOW! What a star!



You did it!

